

# Sets and Counting

Finite Math

24 January 2019

# Sets

A *set* is a collection of objects specified in such a way that we can tell whether any given object is in the set. We usually will denote sets by capital letters. Objects in a set are called *elements* or *members* of the set.

# Sets

A *set* is a collection of objects specified in such a way that we can tell whether any given object is in the set. We usually will denote sets by capital letters. Objects in a set are called *elements* or *members* of the set. Symbolically,

# Sets

A *set* is a collection of objects specified in such a way that we can tell whether any given object is in the set. We usually will denote sets by capital letters. Objects in a set are called *elements* or *members* of the set. Symbolically,

$a \in A$  means “ $a$  is an element of the set  $A$ ”

# Sets

A *set* is a collection of objects specified in such a way that we can tell whether any given object is in the set. We usually will denote sets by capital letters. Objects in a set are called *elements* or *members* of the set. Symbolically,

$a \in A$  means “ $a$  is an element of the set  $A$ ”

$a \notin A$  means “ $a$  is not an element of the set  $A$ ”

# Sets

A *set* is a collection of objects specified in such a way that we can tell whether any given object is in the set. We usually will denote sets by capital letters. Objects in a set are called *elements* or *members* of the set. Symbolically,

$a \in A$  means “ $a$  is an element of the set  $A$ ”

$a \notin A$  means “ $a$  is not an element of the set  $A$ ”

It is possible to have a set without any elements in it. We call this set the *empty set* or *null set*. We denote this set by  $\emptyset$ . An example of a set which is empty is the set of all people who have been to Mars.

# Sets

We often denote sets by listing their elements between a pair of braces:  $\{ \}$ .

# Sets

We often denote sets by listing their elements between a pair of braces:  $\{ \}$ . For example, the following are sets:

$$\{0, 1, 2, 3, 4, 5\}, \{a, b, c, d, e\}, \{1, 2, 3, 4, 5, \dots\}.$$



# Sets

We often denote sets by listing their elements between a pair of braces:  $\{\}$ . For example, the following are sets:

$$\{0, 1, 2, 3, 4, 5\}, \{a, b, c, d, e\}, \{1, 2, 3, 4, 5, \dots\}.$$

Another common way to write sets is by writing a rule in between braces.

# Sets

We often denote sets by listing their elements between a pair of braces:  $\{ \}$ . For example, the following are sets:

$$\{0, 1, 2, 3, 4, 5\}, \{a, b, c, d, e\}, \{1, 2, 3, 4, 5, \dots\}.$$

Another common way to write sets is by writing a rule in between braces. For example,

$$\{x|x \text{ is even}\}, \{x|x \text{ has hit more than 50 home runs in a single season}\}, \{z|z^2 = 1\}.$$

The way to read this second type of set is, for example, “the set of  $x$  such that  $x$  is even” or “the set of  $z$  such that  $z^2 = 1$ .”

# Sets

We often denote sets by listing their elements between a pair of braces:  $\{ \}$ . For example, the following are sets:

$$\{0, 1, 2, 3, 4, 5\}, \{a, b, c, d, e\}, \{1, 2, 3, 4, 5, \dots\}.$$

Another common way to write sets is by writing a rule in between braces. For example,

$$\{x|x \text{ is even}\}, \{x|x \text{ has hit more than 50 home runs in a single season}\}, \{z|z^2 = 1\}.$$

The way to read this second type of set is, for example, “the set of  $x$  such that  $x$  is even” or “the set of  $z$  such that  $z^2 = 1$ . There are two kinds of sets: *finite sets* (the set only has finitely many elements)

# Sets

We often denote sets by listing their elements between a pair of braces:  $\{ \}$ . For example, the following are sets:

$$\{0, 1, 2, 3, 4, 5\}, \{a, b, c, d, e\}, \{1, 2, 3, 4, 5, \dots\}.$$

Another common way to write sets is by writing a rule in between braces. For example,

$$\{x|x \text{ is even}\}, \{x|x \text{ has hit more than 50 home runs in a single season}\}, \{z|z^2 = 1\}.$$

The way to read this second type of set is, for example, “the set of  $x$  such that  $x$  is even” or “the set of  $z$  such that  $z^2 = 1$ . There are two kinds of sets: *finite sets* (the set only has finitely many elements) and *infinite sets* (the set has infinitely many elements).

# Sets

We often denote sets by listing their elements between a pair of braces:  $\{ \}$ . For example, the following are sets:

$$\{0, 1, 2, 3, 4, 5\}, \{a, b, c, d, e\}, \{1, 2, 3, 4, 5, \dots\}.$$

Another common way to write sets is by writing a rule in between braces. For example,

$$\{x|x \text{ is even}\}, \{x|x \text{ has hit more than 50 home runs in a single season}\}, \{z|z^2 = 1\}.$$

The way to read this second type of set is, for example, “the set of  $x$  such that  $x$  is even” or “the set of  $z$  such that  $z^2 = 1$ . There are two kinds of sets: *finite sets* (the set only has finitely many elements) and *infinite sets* (the set has infinitely many elements). The sets  $\{1, 2, 3, 4, 5, \dots\}$  and  $\{x|x \text{ is even}\}$  are infinite sets while the others are finite.

# Example

## Example

*Let  $G$  be the set of all numbers whose square is 9.*

- (a) Denote  $G$  by writing a set with a rule (the second style above).*
- (b) Denote  $G$  by listing the elements (the first style above).*
- (c) Indicate whether the following are true or false:  $3 \in G$ ,  $9 \in G$ ,  $-3 \notin G$ .*

# Subsets

Suppose we have two sets  $A$  and  $B$ .

# Subsets

Suppose we have two sets  $A$  and  $B$ . If every element in the set  $A$  is also in the set  $B$ , we say that  $A$  is a *subset* of  $B$ .



# Subsets

Suppose we have two sets  $A$  and  $B$ . If every element in the set  $A$  is also in the set  $B$ , we say that  $A$  is a *subset* of  $B$ . By definition, every set is a subset of itself.

# Subsets

Suppose we have two sets  $A$  and  $B$ . If every element in the set  $A$  is also in the set  $B$ , we say that  $A$  is a *subset* of  $B$ . By definition, every set is a subset of itself. If  $A$  and  $B$  have the exact same elements, then we say the sets are *equal*.

# Subsets

Suppose we have two sets  $A$  and  $B$ . If every element in the set  $A$  is also in the set  $B$ , we say that  $A$  is a *subset* of  $B$ . By definition, every set is a subset of itself. If  $A$  and  $B$  have the exact same elements, then we say the sets are *equal*. Here is some notation for this:

$A \subset B$  means “ $A$  is a subset of the set  $B$ ”

# Subsets

Suppose we have two sets  $A$  and  $B$ . If every element in the set  $A$  is also in the set  $B$ , we say that  $A$  is a *subset* of  $B$ . By definition, every set is a subset of itself. If  $A$  and  $B$  have the exact same elements, then we say the sets are *equal*. Here is some notation for this:

$A \subset B$  means “ $A$  is a subset of the set  $B$ ”

$A \not\subset B$  means “ $A$  is not a subset of the set  $B$ ”

# Subsets

Suppose we have two sets  $A$  and  $B$ . If every element in the set  $A$  is also in the set  $B$ , we say that  $A$  is a *subset* of  $B$ . By definition, every set is a subset of itself. If  $A$  and  $B$  have the exact same elements, then we say the sets are *equal*. Here is some notation for this:

$A \subset B$  means “ $A$  is a subset of the set  $B$ ”

$A \not\subset B$  means “ $A$  is not a subset of the set  $B$ ”

$A = B$  means “ $A$  and  $B$  have the exact same elements”

# Subsets

Suppose we have two sets  $A$  and  $B$ . If every element in the set  $A$  is also in the set  $B$ , we say that  $A$  is a *subset* of  $B$ . By definition, every set is a subset of itself. If  $A$  and  $B$  have the exact same elements, then we say the sets are *equal*. Here is some notation for this:

$A \subset B$  means “ $A$  is a subset of the set  $B$ ”

$A \not\subset B$  means “ $A$  is not a subset of the set  $B$ ”

$A = B$  means “ $A$  and  $B$  have the exact same elements”

$A \neq B$  means “ $A$  and  $B$  do not have the exact same elements”

# Subsets

Suppose we have two sets  $A$  and  $B$ . If every element in the set  $A$  is also in the set  $B$ , we say that  $A$  is a *subset* of  $B$ . By definition, every set is a subset of itself. If  $A$  and  $B$  have the exact same elements, then we say the sets are *equal*. Here is some notation for this:

$A \subset B$  means “ $A$  is a subset of the set  $B$ ”

$A \not\subset B$  means “ $A$  is not a subset of the set  $B$ ”

$A = B$  means “ $A$  and  $B$  have the exact same elements”

$A \neq B$  means “ $A$  and  $B$  do not have the exact same elements”

It follows that  $\emptyset$  is a subset of every set

# Subsets

Suppose we have two sets  $A$  and  $B$ . If every element in the set  $A$  is also in the set  $B$ , we say that  $A$  is a *subset* of  $B$ . By definition, every set is a subset of itself. If  $A$  and  $B$  have the exact same elements, then we say the sets are *equal*. Here is some notation for this:

$A \subset B$  means “ $A$  is a subset of the set  $B$ ”

$A \not\subset B$  means “ $A$  is not a subset of the set  $B$ ”

$A = B$  means “ $A$  and  $B$  have the exact same elements”

$A \neq B$  means “ $A$  and  $B$  do not have the exact same elements”

It follows that  $\emptyset$  is a subset of every set and if  $A \subset B$  and  $B \subset A$ , then  $A = B$ .



# Example

## Example

Let  $A = \{-3, -1, 1, 3\}$ ,  $B = \{3, -3, 1, -1\}$ ,  $C = \{-3, -2, -1, 0, 1, 2, 3\}$ . Decide the truth of the following statements

$$\begin{array}{lll} A = B & A \subset C & A \subset B \\ C \neq A & C \not\subset A & B \subset A \\ \emptyset \subset A & \emptyset \subset C & \emptyset \notin A \end{array}$$

# Now You Try It!

## Example

Let  $A = \{0, 2, 4, 6\}$ ,  $B = \{0, 1, 2, 3, 4, 5, 6\}$ ,  $C = \{2, 6, 0, 4\}$ . Decide the truth of the following statements

$$\begin{array}{lll} A \subset B & A \subset C & A = C \\ C \subset B & B \not\subset A & \emptyset \subset B \\ 0 \in C & A \notin B & B \subset C \end{array}$$

# Now You Try It!

## Example

Let  $A = \{0, 2, 4, 6\}$ ,  $B = \{0, 1, 2, 3, 4, 5, 6\}$ ,  $C = \{2, 6, 0, 4\}$ . Decide the truth of the following statements

$$\begin{array}{lll} A \subset B & A \subset C & A = C \\ C \subset B & B \not\subset A & \emptyset \subset B \\ 0 \in C & A \notin B & B \subset C \end{array}$$

## Solution

All true except for  $B \subset C$ .

# Finding Subsets

## Example

*Find all subsets of the following sets:*

(a)  $\{a, b\}$

(b)  $\{1, 2, 3\}$

(c)  $\{\alpha, \beta, \gamma, \delta\}$

# Set Operations

Given sets, there are various operations we can perform with them.

# Set Operations

Given sets, there are various operations we can perform with them. To see these, it can be useful to visualize these with Venn Diagrams.

# Set Operations

Given sets, there are various operations we can perform with them. To see these, it can be useful to visualize these with Venn Diagrams. First, we imagine that all of the sets in our problem live in some *universal set*, which we will denote by  $U$ , that is, we will assume that all of our sets are subsets of  $U$ .

# Set Operations

Given sets, there are various operations we can perform with them. To see these, it can be useful to visualize these with Venn Diagrams. First, we imagine that all of the sets in our problem live in some *universal set*, which we will denote by  $U$ , that is, we will assume that all of our sets are subsets of  $U$ .

To illustrate the set operations, we will use both actual sets and Venn diagrams. Let  $U = \{1, 2, 3, 4, 5, 6, 7, 8, 9\}$ ,  $A = \{1, 2, 3, 4, 5\}$ , and  $B = \{3, 4, 5, 6, 7\}$ .



# Set Operations

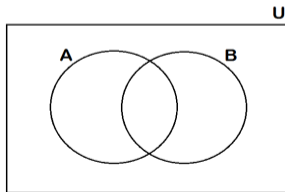
Given sets, there are various operations we can perform with them. To see these, it can be useful to visualize these with Venn Diagrams. First, we imagine that all of the sets in our problem live in some *universal set*, which we will denote by  $U$ , that is, we will assume that all of our sets are subsets of  $U$ .

To illustrate the set operations, we will use both actual sets and Venn diagrams. Let  $U = \{1, 2, 3, 4, 5, 6, 7, 8, 9\}$ ,  $A = \{1, 2, 3, 4, 5\}$ , and  $B = \{3, 4, 5, 6, 7\}$ . For the Venn diagram, we will shade in the relevant regions of this diagram:

# Set Operations

Given sets, there are various operations we can perform with them. To see these, it can be useful to visualize these with Venn Diagrams. First, we imagine that all of the sets in our problem live in some *universal set*, which we will denote by  $U$ , that is, we will assume that all of our sets are subsets of  $U$ .

To illustrate the set operations, we will use both actual sets and Venn diagrams. Let  $U = \{1, 2, 3, 4, 5, 6, 7, 8, 9\}$ ,  $A = \{1, 2, 3, 4, 5\}$ , and  $B = \{3, 4, 5, 6, 7\}$ . For the Venn diagram, we will shade in the relevant regions of this diagram:



# Unions

# Unions

## Definition (Union)

*The union of two sets  $A$  and  $B$  is the new set, denoted  $A \cup B$ , which consists of all elements which are in  $A$  or in  $B$ .*

$$A \cup B = \{x \mid x \in A \text{ or } x \in B\}.$$

# Unions

## Definition (Union)

*The union of two sets  $A$  and  $B$  is the new set, denoted  $A \cup B$ , which consists of all elements which are in  $A$  or in  $B$ .*

$$A \cup B = \{x \mid x \in A \text{ or } x \in B\}.$$

Using the sets above,

$$A \cup B =$$

# Unions

## Definition (Union)

*The union of two sets  $A$  and  $B$  is the new set, denoted  $A \cup B$ , which consists of all elements which are in  $A$  or in  $B$ .*

$$A \cup B = \{x \mid x \in A \text{ or } x \in B\}.$$

Using the sets above,

$$A \cup B = \{1, 2, 3, 4, 5, 6, 7\}$$

# Unions

## Definition (Union)

*The union of two sets  $A$  and  $B$  is the new set, denoted  $A \cup B$ , which consists of all elements which are in  $A$  or in  $B$ .*

$$A \cup B = \{x \mid x \in A \text{ or } x \in B\}.$$

Using the sets above,

$$A \cup B = \{1, 2, 3, 4, 5, 6, 7\}$$

and as a Venn Diagram

# Unions

## Definition (Union)

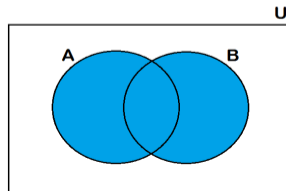
The union of two sets  $A$  and  $B$  is the new set, denoted  $A \cup B$ , which consists of all elements which are in  $A$  or in  $B$ .

$$A \cup B = \{x \mid x \in A \text{ or } x \in B\}.$$

Using the sets above,

$$A \cup B = \{1, 2, 3, 4, 5, 6, 7\}$$

and as a Venn Diagram





# Intersections

# Intersections

## Definition (Intersection)

*The intersection of two sets  $A$  and  $B$  is the new set, denoted  $A \cap B$ , which consists of all elements which are in  $A$  and in  $B$ .*

$$A \cap B = \{x \mid x \in A \text{ and } x \in B\}.$$

# Intersections

## Definition (Intersection)

*The intersection of two sets  $A$  and  $B$  is the new set, denoted  $A \cap B$ , which consists of all elements which are in  $A$  and in  $B$ .*

$$A \cap B = \{x \mid x \in A \text{ and } x \in B\}.$$

Using the sets above,

$$A \cap B =$$

# Intersections

## Definition (Intersection)

*The intersection of two sets  $A$  and  $B$  is the new set, denoted  $A \cap B$ , which consists of all elements which are in  $A$  and in  $B$ .*

$$A \cap B = \{x \mid x \in A \text{ and } x \in B\}.$$

Using the sets above,

$$A \cap B = \{3, 4, 5\}$$

# Intersections

## Definition (Intersection)

*The intersection of two sets  $A$  and  $B$  is the new set, denoted  $A \cap B$ , which consists of all elements which are in  $A$  and in  $B$ .*

$$A \cap B = \{x \mid x \in A \text{ and } x \in B\}.$$

Using the sets above,

$$A \cap B = \{3, 4, 5\}$$

and as a Venn Diagram

# Intersections

## Definition (Intersection)

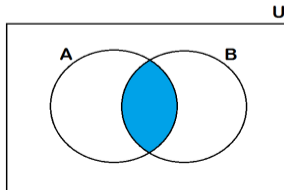
The intersection of two sets  $A$  and  $B$  is the new set, denoted  $A \cap B$ , which consists of all elements which are in  $A$  and in  $B$ .

$$A \cap B = \{x \mid x \in A \text{ and } x \in B\}.$$

Using the sets above,

$$A \cap B = \{3, 4, 5\}$$

and as a Venn Diagram



# Intersections

In general, it is possible that two sets do not have any elements in common.

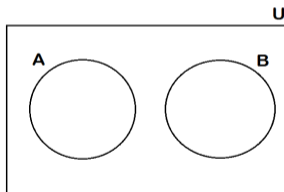
# Intersections

In general, it is possible that two sets do not have any elements in common. For example, if we had  $B = \{7, 8, 9\}$  instead, then  $A \cap B = \emptyset$



# Intersections

In general, it is possible that two sets do not have any elements in common. For example, if we had  $B = \{7, 8, 9\}$  instead, then  $A \cap B = \emptyset$  and as a Venn diagram we have a picture like:



# Complements

# Complements

## Definition (Complement)

*The complement of a set  $A$  is the new set, denoted  $A'$ , which consists of all elements which are in  $U$ , but not in  $A$ .*

$$A' = \{x \in U \mid x \notin A\}.$$

# Complements

## Definition (Complement)

*The complement of a set  $A$  is the new set, denoted  $A'$ , which consists of all elements which are in  $U$ , but not in  $A$ .*

$$A' = \{x \in U \mid x \notin A\}.$$

Using the sets above,

$$A' =$$

# Complements

## Definition (Complement)

*The complement of a set  $A$  is the new set, denoted  $A'$ , which consists of all elements which are in  $U$ , but not in  $A$ .*

$$A' = \{x \in U \mid x \notin A\}.$$

Using the sets above,

$$A' = \{6, 7, 8, 9\}$$

# Complements

## Definition (Complement)

*The complement of a set  $A$  is the new set, denoted  $A'$ , which consists of all elements which are in  $U$ , but not in  $A$ .*

$$A' = \{x \in U \mid x \notin A\}.$$

Using the sets above,

$$A' = \{6, 7, 8, 9\}$$

and as a Venn Diagram

# Complements

## Definition (Complement)

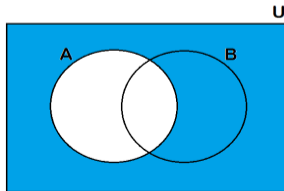
The complement of a set  $A$  is the new set, denoted  $A'$ , which consists of all elements which are in  $U$ , but not in  $A$ .

$$A' = \{x \in U \mid x \notin A\}.$$

Using the sets above,

$$A' = \{6, 7, 8, 9\}$$

and as a Venn Diagram



# Examples

## Example

Let  $A = \{3, 6, 9\}$ ,  $B = \{3, 4, 5, 6, 7\}$ ,  $C = \{4, 5, 7\}$ , and  $U = \{1, 2, 3, 4, 5, 6, 7, 8, 9\}$ . Find  $A \cup B$ ,  $A \cap B$ ,  $A \cap C$ , and  $B'$ .



## Now You Try It!

### Example

Let  $R = \{1, 2, 3, 4\}$ ,  $S = \{1, 3, 5, 7\}$ ,  $T = \{2, 4\}$ , and  $U = \{1, 2, 3, 4, 5, 6, 7, 8, 9\}$ . Find  $R \cup S$ ,  $R \cap S$ ,  $S \cap T$ , and  $S'$ .

# Now You Try It!

## Example

Let  $R = \{1, 2, 3, 4\}$ ,  $S = \{1, 3, 5, 7\}$ ,  $T = \{2, 4\}$ , and  $U = \{1, 2, 3, 4, 5, 6, 7, 8, 9\}$ . Find  $R \cup S$ ,  $R \cap S$ ,  $S \cap T$ , and  $S'$ .

## Solution

$$R \cup S = \{1, 2, 3, 4, 5, 7\}$$

$$R \cap S = \{1, 3\}$$

$$S \cap T = \{2, 4\}$$

$$S' = \{2, 4, 6, 8, 9\}$$

# Counting

# Counting



# Counting

Finally, the last operation we have on sets here is to count the number of elements in a set. We will denote the number of elements in a set  $A$  by  $n(A)$ .

# Counting

Finally, the last operation we have on sets here is to count the number of elements in a set. We will denote the number of elements in a set  $A$  by  $n(A)$ . Let again  $A = \{1, 2, 3, 4, 5\}$ ,  $B = \{3, 4, 5, 6, 7\}$ , and  $U = \{1, 2, 3, 4, 5, 6, 7, 8, 9\}$ .

# Counting

Finally, the last operation we have on sets here is to count the number of elements in a set. We will denote the number of elements in a set  $A$  by  $n(A)$ . Let again  $A = \{1, 2, 3, 4, 5\}$ ,  $B = \{3, 4, 5, 6, 7\}$ , and  $U = \{1, 2, 3, 4, 5, 6, 7, 8, 9\}$ . We have the following facts:

# Counting

Finally, the last operation we have on sets here is to count the number of elements in a set. We will denote the number of elements in a set  $A$  by  $n(A)$ . Let again  $A = \{1, 2, 3, 4, 5\}$ ,  $B = \{3, 4, 5, 6, 7\}$ , and  $U = \{1, 2, 3, 4, 5, 6, 7, 8, 9\}$ . We have the following facts:

$$n(A) =$$



# Counting

Finally, the last operation we have on sets here is to count the number of elements in a set. We will denote the number of elements in a set  $A$  by  $n(A)$ . Let again  $A = \{1, 2, 3, 4, 5\}$ ,  $B = \{3, 4, 5, 6, 7\}$ , and  $U = \{1, 2, 3, 4, 5, 6, 7, 8, 9\}$ . We have the following facts:

$$n(A) = 5$$

$$n(B) =$$

# Counting

Finally, the last operation we have on sets here is to count the number of elements in a set. We will denote the number of elements in a set  $A$  by  $n(A)$ . Let again  $A = \{1, 2, 3, 4, 5\}$ ,  $B = \{3, 4, 5, 6, 7\}$ , and  $U = \{1, 2, 3, 4, 5, 6, 7, 8, 9\}$ . We have the following facts:

$$n(A) = 5$$

$$n(B) = 5$$

$$n(A \cap B) =$$

# Counting

Finally, the last operation we have on sets here is to count the number of elements in a set. We will denote the number of elements in a set  $A$  by  $n(A)$ . Let again  $A = \{1, 2, 3, 4, 5\}$ ,  $B = \{3, 4, 5, 6, 7\}$ , and  $U = \{1, 2, 3, 4, 5, 6, 7, 8, 9\}$ . We have the following facts:

$$n(A) = 5$$

$$n(B) = 5$$

$$n(A \cap B) = 3$$

$$n(A \cup B) =$$

# Counting

Finally, the last operation we have on sets here is to count the number of elements in a set. We will denote the number of elements in a set  $A$  by  $n(A)$ . Let again  $A = \{1, 2, 3, 4, 5\}$ ,  $B = \{3, 4, 5, 6, 7\}$ , and  $U = \{1, 2, 3, 4, 5, 6, 7, 8, 9\}$ . We have the following facts:

$$n(A) = 5$$

$$n(B) = 5$$

$$n(A \cap B) = 3$$

$$n(A \cup B) = 7$$

$$n(A') =$$

# Counting

Finally, the last operation we have on sets here is to count the number of elements in a set. We will denote the number of elements in a set  $A$  by  $n(A)$ . Let again  $A = \{1, 2, 3, 4, 5\}$ ,  $B = \{3, 4, 5, 6, 7\}$ , and  $U = \{1, 2, 3, 4, 5, 6, 7, 8, 9\}$ . We have the following facts:

$$n(A) = 5$$

$$n(B) = 5$$

$$n(A \cap B) = 3$$

$$n(A \cup B) = 7$$

$$n(A') = 4$$

$$n(A \cap B') =$$

# Counting

Finally, the last operation we have on sets here is to count the number of elements in a set. We will denote the number of elements in a set  $A$  by  $n(A)$ . Let again  $A = \{1, 2, 3, 4, 5\}$ ,  $B = \{3, 4, 5, 6, 7\}$ , and  $U = \{1, 2, 3, 4, 5, 6, 7, 8, 9\}$ . We have the following facts:

$$n(A) = 5$$

$$n(B) = 5$$

$$n(A \cap B) = 3$$

$$n(A \cup B) = 7$$

$$n(A') = 4$$

$$n(A \cap B') = 2$$

$$n(\emptyset) = 0$$

# Example

## Example

*Let the universal set  $U$  be the set of positive integers less than or equal to 100. Let  $A$  be the set of multiples of 3 in  $U$ , and let  $B$  be the set of multiples of 5 in  $U$ .*

- (a) Find  $n(A \cap B)$ ,  $n(A \cap B')$ ,  $n(B \cap A')$ , and  $n(A' \cap B')$ .*
- (b) Draw a Venn diagram with circles labeled  $A$  and  $B$ , indicating the numbers of elements in the subsets of part (a).*

# Now You Try It!

## Example

*Let the universal set  $U$  be the set of positive integers less than or equal to 100. Let  $A$  be the set of multiples of 4 in  $U$ , and let  $B$  be the set of multiples of 7 in  $U$ .*

- (a) Find  $n(A \cap B)$ ,  $n(A \cap B')$ ,  $n(B \cap A')$ , and  $n(A' \cap B')$ .*
- (b) Draw a Venn diagram with circles labeled  $A$  and  $B$ , indicating the numbers of elements in the subsets of part (a).*



## Now You Try It!

### Example

Let the universal set  $U$  be the set of positive integers less than or equal to 100. Let  $A$  be the set of multiples of 4 in  $U$ , and let  $B$  be the set of multiples of 7 in  $U$ .

- Find  $n(A \cap B)$ ,  $n(A \cap B')$ ,  $n(B \cap A')$ , and  $n(A' \cap B')$ .
- Draw a Venn diagram with circles labeled  $A$  and  $B$ , indicating the numbers of elements in the subsets of part (a).

### Solution

(a)  $n(A \cap B) = 3$ ,  $n(A \cap B') = 22$ ,  $n(B \cap A') = 11$ , and  $n(A' \cap B') = 64$ .

# Basic Counting

# Basic Counting



# Addition Principle

Suppose that there are 15 male and 20 female Physics majors at a university. How many total Physics majors are there?

# Addition Principle

Suppose that there are 15 male and 20 female Physics majors at a university. How many total Physics majors are there?

Now, suppose that every freshmen who is majoring in Chemistry is enrolled in Calculus or in History. If there are 20 freshmen Chemistry majors enrolled in Calculus and 15 freshmen Chemistry majors enrolled in History. How many total freshmen Chemistry majors are there?

# Addition Principle

Suppose that there are 15 male and 20 female Physics majors at a university. How many total Physics majors are there?

Now, suppose that every freshmen who is majoring in Chemistry is enrolled in Calculus or in History. If there are 20 freshmen Chemistry majors enrolled in Calculus and 15 freshmen Chemistry majors enrolled in History. How many total freshmen Chemistry majors are there?

Theorem (Addition Principle for Counting)

*For any two sets  $A$  and  $B$ ,*

$$n(A \cup B) = n(A) + n(B) - n(A \cap B).$$

## Now You Try It!

### Example

*According to a survey of business firms in a certain city, 345 firms offer their employees group life insurance, 285 offer long-term disability insurance, and 115 offer group life insurance and long-term disability insurance. How many firms offer their employees group life insurance or long-term disability insurance?*

## Now You Try It!

### Example

*According to a survey of business firms in a certain city, 345 firms offer their employees group life insurance, 285 offer long-term disability insurance, and 115 offer group life insurance and long-term disability insurance. How many firms offer their employees group life insurance or long-term disability insurance?*

### Solution

515



# Multiplication Principle

## Example

*Suppose a store has 3 types of shirts, and in each type of shirt, they have 4 colors available. How many options are available?*

# Multiplication Principle

## Theorem (Multiplication Principle for Counting)

- ① *If two operations  $O_1$  and  $O_2$  are performed in order, with  $N_1$  possible outcomes for the first operation and  $N_2$  possible outcomes for the second operation, then there are*

$$N_1 \cdot N_2$$

*possible combined outcomes of the first operation followed by the second operation.*

- ② *In general, if  $n$  operations  $O_1, O_2, \dots, O_n$  are performed in order, with possible number of number of outcomes  $N_1, N_2, \dots, N_n$ , respectively, then there are*

$$N_1 \cdot N_2 \cdots N_n$$

*possible combined outcomes of the operations performed in the given order.*

## Now You Try It!

### Example

*Suppose a 6-sided die and a 12-sided die are rolled. How many different possible outcomes are there?*

## Now You Try It!

### Example

*Suppose a 6-sided die and a 12-sided die are rolled. How many different possible outcomes are there?*

### Solution

72

# More Multiplication Principle

## Example

*Suppose we have a list of 8 letters that we wish to make code words from. How many possible 4-letter code words can be made if:*

- (a) letters can be repeated?*
- (b) no letter can be repeated?*
- (c) adjacent letters cannot be alike?*

## Now You Try It!

### Example

*Suppose we have a list of 10 letters that we wish to make code words from. How many possible 5-letter code words can be made if:*

- (a) letters can be repeated?*
- (b) no letter can be repeated?*
- (c) adjacent letters cannot be alike?*

## Now You Try It!

### Example

*Suppose we have a list of 10 letters that we wish to make code words from. How many possible 5-letter code words can be made if:*

- (a) letters can be repeated?*
- (b) no letter can be repeated?*
- (c) adjacent letters cannot be alike?*

### Solution

*(a) 100,000, (b) 30,240, (c) 65,610*

# Combining Rules

## Example

*There are 30 teams in the MLB. Suppose a store sells both fitted and snapback baseball caps. Suppose the store carries standard and alternate versions of the fitted cap for each team, but only the standard version of the cap for the snapback cap. How many total different baseball caps do they sell?*